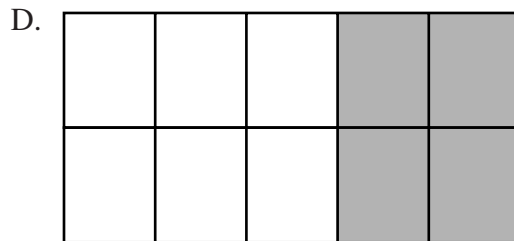
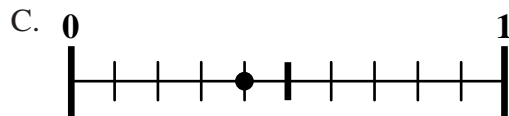
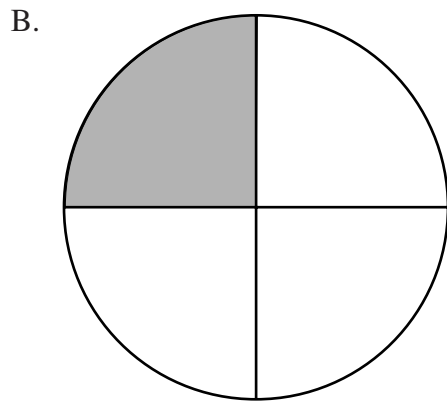


Mathematics, Grade 4

34 Which of the following does **not** represent 0.4?



Reporting Category for Item 34: *Number Sense and Operations*

Mathematics, Grade 4

- 35 Minh opened a bottle containing 1 liter of juice. If she shared the juice equally with her sister Anne, how many milliliters (mL) of juice will each get? (1 liter = 1000 mL)



- A. 20 milliliters
- B. 50 milliliters
- C. 200 milliliters
- D. 500 milliliters

Reporting Category for Item 35: *Measurement*

- 36 Dwayne used a rule to make the list of numbers shown.

1, 2, 5, 10, 17, ?

If he uses the same rule to continue the list, which number should he write next?

- A. 20
- B. 22
- C. 24
- D. 26

Reporting Category for Item 36: *Patterns, Relations, and Algebra*