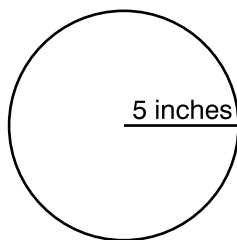


Use the picture below to answer question 33.



- 33 A circle has a radius of 5 inches. Which is the best estimate of its circumference?
- A. 15 inches
 - B. 30 inches
 - C. $7\frac{1}{2}$ inches
 - D. 75 inches

Reporting Category for Item 33: *Measurement* (p. 255)

Mathematics, Grade 6

- 34 This is how the 6th graders at Washington Middle School spent their recess time one day:

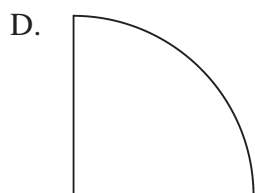
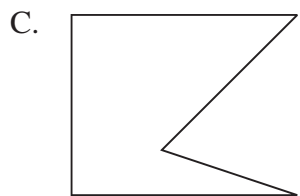
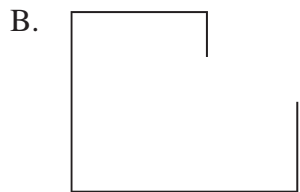
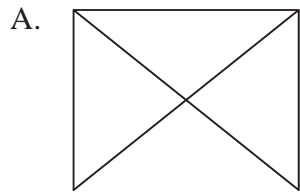
- 24 played football
- 10 played basketball
- 14 talked to friends

Which shows a ratio of 5 to 7?

- A. talked to friends: played basketball
- B. played basketball: talked to friends
- C. played basketball: played football
- D. talked to friends: played football

*Reporting Category for Item 34: **Number Sense and Operations** (p. 253)*

35 Which figure is a polygon?



Reporting Category for Item 35: *Geometry* (p. 255)

