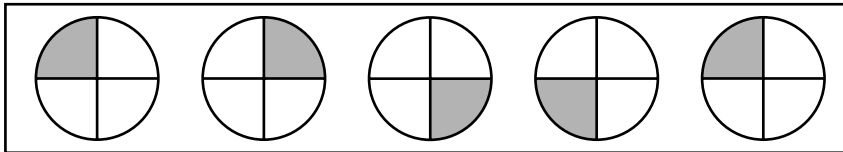
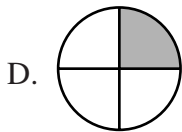
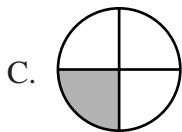
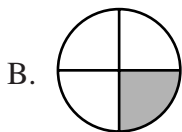
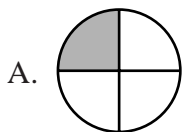


Use the pattern in the box below to answer question 37.



37 What is the 8th figure in the pattern above?



Reporting Category for Item 37: *Patterns, Relations, and Algebra* (p. 219)

## Mathematics, Grade 4

38 Which fact is in the same fact family as  $72 \div 9 = \square$ ?

A.  $9 \times \square = 72$

B.  $72 \times 9 = \square$

C.  $\square \div 72 = 9$

D.  $9 \div \square = 72$

*Reporting Category for Item 38: Number Sense and Operations (p. 217)*

39 Which pair of numbers makes the number sentence FALSE?

$$\bigcirc \div \square = 20$$

A.  $\textcircled{100}, \textcircled{5}$

B.  $\textcircled{80}, \textcircled{4}$

C.  $\textcircled{60}, \textcircled{3}$

D.  $\textcircled{50}, \textcircled{2}$

*Reporting Category for Item 39: Patterns, Relations, and Algebra (p. 219)*