
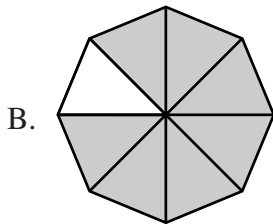



Session 2, Multiple-Choice Questions

33 Which picture correctly shows $\frac{7}{8}$?



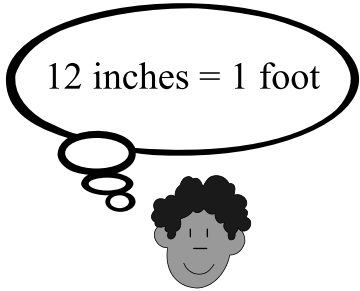
Reporting Category for Item 33: *Number Sense and Operations* (p. 217)

Mathematics, Grade 4

Use the information in the chart below to answer answer question 34.

Growth Rate of Alligators

Years 1-5	1 foot per year
Years 6-9	3 inches per year



12 inches = 1 foot

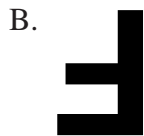
- 34** About how much will an average alligator have grown by the time it is ten years old?
- A. 6 feet
 - B. 9 feet
 - C. 10 feet
 - D. 17 feet

Reporting Category for Item 34: *Data Analysis, Statistics, and Probability* (p. 220)

Use the letter in the box to answer question 35.



35 Which shows the letter after it has been FLIPPED ONCE?



Reporting Category for Item 35: *Geometry* (p. 219)

