

21. Which number fits ALL of these clues?

- a multiple of 3
- an even number
- a multiple of 8
- not a multiple of 9

- A. 48
- B. 54
- C. 63
- D. 72


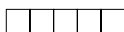


*Reporting Category/Substrand for Item 21: **Number Sense/Number Sense and Numeration (p. 117)***

22. Your lunch time begins at 12:40 P.M. If your lunch time is 35 minutes long, what time does it end?

- A. 12:05 P.M.
- B. 1:10 P.M.
- C. 1:15 P.M.
- D. 1:30 P.M.

*Reporting Category/Substrand for Item 22: **Geometry and Measurement/Measurement (p. 120)***

23. Which shape CAN be folded to form an OPEN box?

- A. 
- B. 
- C. 
- D. 

*Reporting Category/Substrand for Item 23: **Geometry and Measurement/Geometry and Spatial Sense (p. 119)***

24. What number does n stand for in the sentence below?

$$(8 + 2) + 6 = 8 + (n + 6)$$

- A. 2
- B. 6
- C. 8
- D. 16

*Reporting Category/Substrand for Item 24: **Patterns, Relations, and Functions/Algebra/Mathematical Structures (p. 119)***