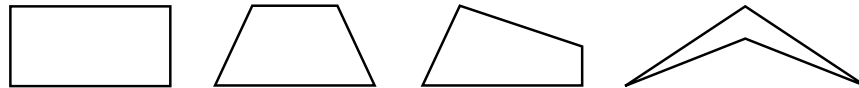
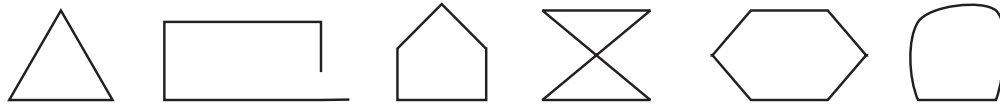


**Session 1, Open-response Question**

13. These shapes are quadrilaterals.



These shapes are not quadrilaterals.



a. Write a complete definition for a quadrilateral. Be sure to tell all the important ideas about what makes a quadrilateral.

b. This is a rhombus:

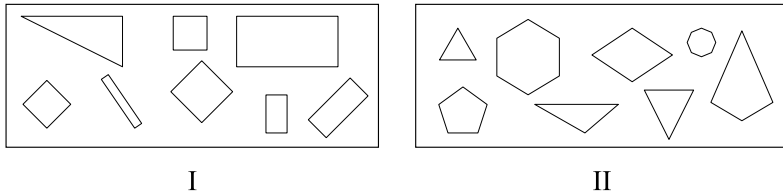


A rhombus is a special kind of quadrilateral. Explain what makes it different from other quadrilaterals.

*Reporting Category/Substrand for Item 13: **Geometry and Measurement/Geometry and Spatial Sense (p. 119)***

**Session 1, Multiple-choice Questions**

Use the sets below to answer question 14.



14. What rule did Ray use to sort the shapes above into two groups?

- A. I = three sides  
II = four sides
- B. I = big shapes  
II = small shapes
- C. I = shapes with right angles  
II = shapes without right angles
- D. I = shapes with four or more angles  
II = shapes with less than four angles

*Reporting Category/Substrand for Item 14: **Geometry and Measurement/Geometry and Spatial Sense (p. 119)***

15. What is the GREATEST number of different outfits you can make with 2 pairs of pants and 5 shirts? (Each outfit must have exactly one pair of pants and one shirt.)

- A. 5
- B. 7
- C. 10
- D. 25

*Reporting Category/Substrand for Item 15: **Statistics and Probability/NA (p. 120)***

16. Which does NOT equal 452?

- A. 3 hundreds, 5 tens, 12 ones
- B. 3 hundreds, 15 tens, 2 ones
- C. 4 hundreds, 5 tens, 2 ones
- D. 4 hundreds, 4 tens, 12 ones

*Reporting Category/Substrand for Item 16: **Number Sense/Number Sense and Numeration (p. 117)***